

බස්නාහිර පළාත් අධ්‍යාපන දෙපාර්තමේන්තුව  
 மேல் மாகாணக் கல்வித் திணைக்களம்  
 Department Of Education – Western Province  
 බස්නාහිර පළාත් අධ්‍යාපන දෙපාර්තමේන්තුව  
 மேல் மாகாணக் கல்வித் திணைக்களம்  
 Department Of Education – Western Province

පළමු වාර ඇගයීම  
 முதலாம் தவணைமதிப்பீடு - 2019  
 First Term Evaluation

ශ්‍රේණිය } 11  
 தரம் }  
 Grade }  
 විෂය }  
 பாடம் } Mathematics  
 Subject }  
 පත්‍රය } I  
 வினாத்தாள் }  
 Paper }  
 කාලය } Two Hours  
 කාලம் }  
 Time }

Name :-.....

Index Number :- .....  
 .....  
 Signature of Invigilator

Important:

- This paper consist of 8 pages
- Write your **index no** correctly in the appropriate place on the **page one** and **page three**.
- Answer all questions **on this paper itself**.
- Use the space provided under each question for working and writing the answer.
- It is necessary to write relevant steps and correct units.
- Marks will be awarded follows :  
 02 marks each for questions 1 – 25 in part A  
 10 marks each for questions in part B.

For marking examiner's use only		
Part	Question number	Marks
A	1 – 25	
B	1	
	2	
	3	
	4	
	5	
Total		

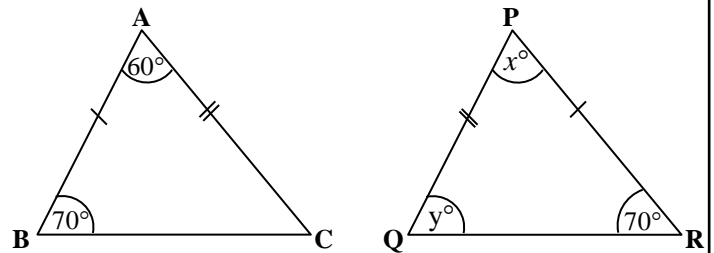
**Part A****Answer all the questions on this paper itself.**

01. When an item worth Rs. 1000 is imported 6% of duty is charged. Calculate the duty.

02. Add.  $\frac{1}{3x} + \frac{1}{x}$

03. Express in index form.  $\log_5 125 = 3$

04. In the given figure, the triangles ABC and PQR are congruent. According to the given information, Find the values of  $x$  and  $y$ .



05. A bus travels at a uniform speed of  $16 \text{ ms}^{-1}$ . Find the distance it travel in 3 seconds.

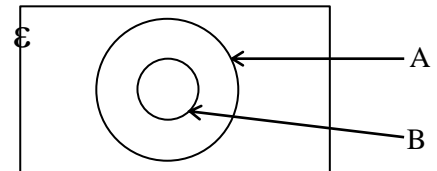
06. Find the least common multiple of the expressions  $xy$  and  $2x^2$ .

07. Kamal gave Rs. 64 000 to monthly simple interest of 2%. Calculate the interest Kamal received after 5 months.

08. Square root of a number  $x$  to the first approximation is 3.1. What is the nearest perfect square number to  $x$ ?

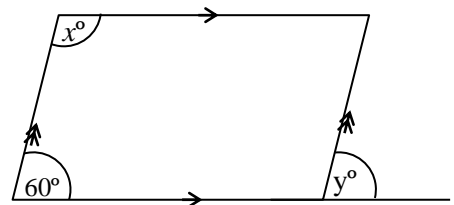
09. Find the volume of a right circular cylinder with the radius 7cm and the height 20cm. (The volume of a cylinder with the radius  $r$  and the height  $h$  is  $\pi r^2 h$ )

10. Shade the region  $A \cap B$  in the given Venn diagram.



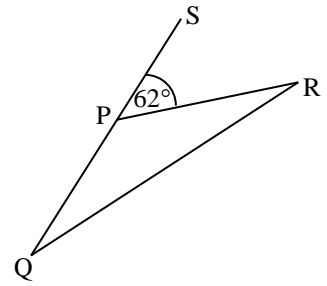
11. Find the factors.  $20 + x - x^2$

12. According to the information given in the figure, find the value of  $x + y$ .



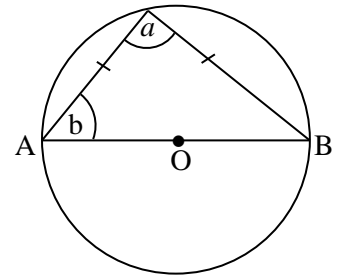
13. Solve.  $1 + \frac{3}{x} = 2$

14. In the triangle PQR,  $PQ = PR$ . QP side is produced to S.  
If  $\widehat{RPS} = 62^\circ$ , find the magnitude of  $\widehat{PQR}$ .

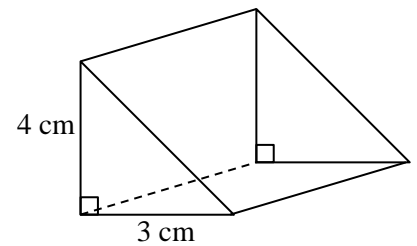


15. Write down the equation of the straight line with the gradient 2 and the intercept (-3).

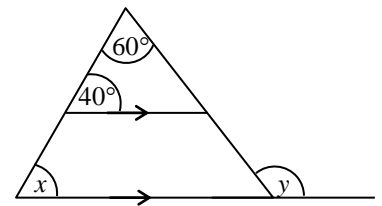
16. In the circle with the centre O, AB is a diameter.  
According to the given information find the values of  $a$  and  $b$ .



17. If the volume of the prism is  $60\text{cm}^3$ , find the length of it.



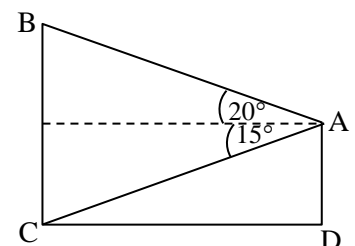
18. According to the information given in the figure, find the values of  $x$  and  $y$ .



19. Solve the inequality  $x + 3 \geq 5$  and write the smallest whole number that  $x$  can take.

20. According to the measurements given in the figure, write the...

- Angle of depression of A from B.
- Angle of elevation of A from C.

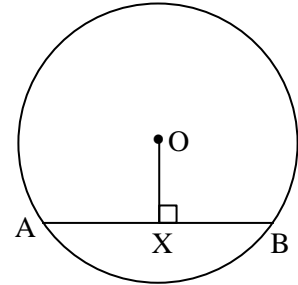


21. Information given below represents the weight of some students to the nearest kilogram.

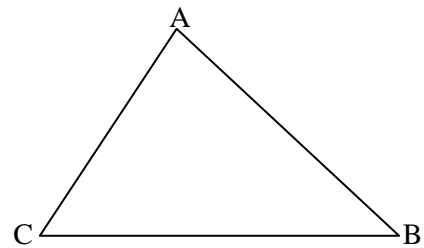
32 , 28 , 40 , 33 , 27

How many students are there who weigh more than the mean weight?

22. In the circle with the centre O, radius is 5cm and the length of AB chord is 6cm. Find OX length.



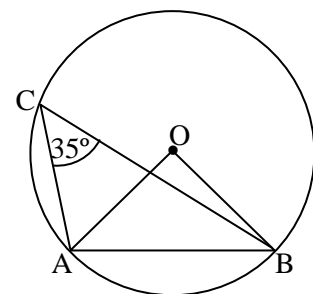
23. In the given triangle ABC, draw a sketch to represent the locus of a moving point which passes through the point A, parallel to the side BC.



24. For the Sample space  $S = \{ 1, 2, 3, 4, 5, 6, 7, 8 \}$

- i. Write down a simple event.
- ii. Write down a composite event.

25. The centre of the given circle is O. According to the given information find the magnitude of the angle  $\hat{OAB}$ .



## Part B

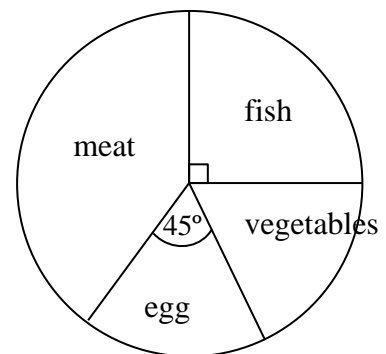
Answer all the questions on this paper itself.

01.  $\frac{3}{4}$  of the capacity of a certain oil tank is filled with oil. Due to a leak in its tap,  $\frac{1}{4}$  of the oil in it got wasted during a day.

- (i) What fraction of the whole tank was empty at the beginning?
- (ii) What fraction of the oil in the whole tank got wasted during a day?
- (iii) At the end of the day, if 100 liters of oil was remaining in the tank, what is the capacity of the tank?
- (iv) If one liter of oil costs Rs. 150, find the value of the oil that got wasted.

02. The information collected about the lunch preferred by 120 people who were participated for a certain gathering is given in the following incomplete table and the pie chart.

Type of food	No of people
meat	50
fish	.....
egg	.....
vegetable	.....



- (i) Fill in the blanks in the table.
- (ii) What is the angle of the centre of the sector which represent the people who ate meat?
- (iii) If all the people who preferred egg ate vegetables and all the people who preferred fish ate meat, find the ratio between the number of people who ate vegetables and the number of people who ate meat.

**03.** A person who decided to travel from his car, went to a petrol shed and pumped 60 liters of petrol into his car within 60 seconds through a pump before starting his journey.

(i) Find the rate at which petrol flows out of the pump.

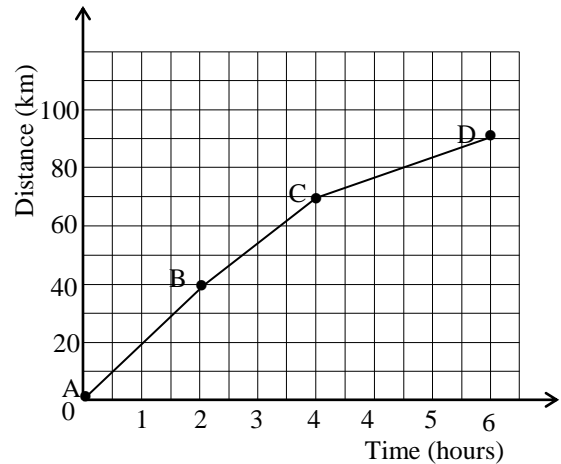
The distance time graph of his motion is given below.

(ii) Find the total distance of his journey.

(iii) Find the average speed of the journey.

(iv) Find the speed of the BC part of his journey.

(v) If he maintains the speed at BC part throughout the journey, find the time takes for the whole journey.



**04. (a)** If Amitha paid Rs. 7 200 of value added tax, when buying a refrigerator worth Rs. 72 000,

(i) What is the value of the refrigerator after paying the tax?

(ii) What is the percentage of tax charged?

**(b)** First Rs. 500 000 of a person's annual income is tax free. A tax of 4% is charged for the next Rs. 500 000 and a tax of 8% is charged for the balanced income.

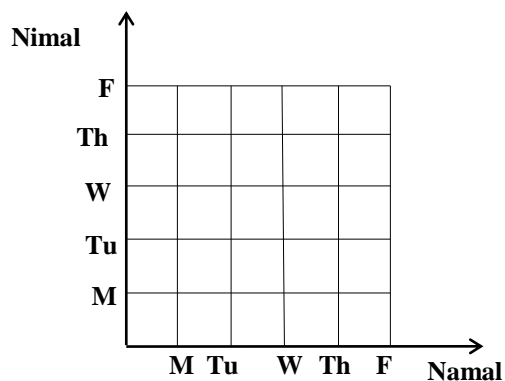
His annual income is Rs.1 075 000.

(i) Find the tax to be paid as 4% .

(ii) Find the tax to be paid as 8% .

(iii) Find the total income tax to be paid.

05. (a) Namal and Nimal go to the public library once every weekday. Given grid shows all the possible ways that they can go to the library during the following week.



- (i) Represent the sample space of the event, Nimal and Namal going to the library during weekdays.
- (ii) Find the probability that Nimal going to the library on Wednesday.
- (iii) Find the probability that both of them going to the library on the same day.
- (iv) Find the probability that at least one of them going to the library on Wednesday.
- (v) Find the probability that Namal going to the library before Nimal.





සියලු ම හිමිකම් ඇවිරිණි / முழுப் பதிப்புரிமையுடையது / All Rights Reserved

බස්නාහිර පළාත් අධ්‍යාපන දෙපාර්තමේන්තුව  
 மேல் மாகாணக் கல்வித் திணைக்களம்  
 Department Of Education – Western Province  
 Department Of Education – Western Province

බස්නාහිර පළාත් අධ්‍යාපන දෙපාර්තමේන්තුව  
 மேல் மாகாணக் கல்வித் திணைக்களம்  
 Department Of Education – Western Province  
 Department Of Education – Western Province

පළාත් අධ්‍යාපන දෙපාර්තමේන්තුව  
 மேல் மாகாணக் கல்வித் திணைக்களம்  
 Department Of Education – Western Province  
 Department Of Education – Western Province

පළමු වාර ඇගයීම  
 முதலாம் தவணை பரீட்சை - 2019  
 First Term Evaluation

ශ්‍රේණිය } 11  
 தரம் } 11  
 Grade } 11

විෂයය }  
 பாடம் } Mathematics  
 Subject } Mathematics

පත්‍රය } II  
 வினாத்தாள் } II  
 Paper } II

කාලය } 3hours  
 காலம் } 3hours  
 Time } 3hours

- ◆ Answer 10 questions selecting 05 questions from part A and 05 questions from part B.
- ◆ Each question carries 10 marks. This question paper carries 100 marks.
- ◆ Volume of a cone with the radius  $r$  and the height  $h$  is  $\frac{1}{3}\pi r^2 h$ .
- ◆ Volume of a sphere with the radius  $r$  is  $\frac{4}{3}\pi r^3$ .

### Part A

Answer five questions only.

01. An incomplete table of values prepared to draw the graph of the function  $y = 4 - x^2$  is given below.

$x$	-3	-2	-1	0	1	2	3
$y$	-5	0	3	.....	3	0	-5

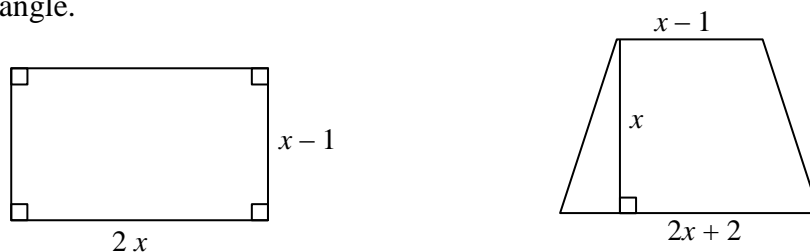
- (a) (i) Find the value of  $y$  when  $x = 0$   
 (ii) Using a suitable scale, draw the graph of the function on the given graph paper.
- (b) Using the graph,  
 (i) Find the maximum value of the function.  
 (ii) Write the interval of values of  $x$  where  $y \geq 3$ .  
 (iii) Find the roots of the equation  $(2 - x)(2 + x) = 0$ .  
 (iv) Find the interval of values of  $x$ , where the function decreases negatively.
02. A certain urban council charges an annual rates of 12% from a house of assessed annual value Rs. 50 000. The house owner rented this house for a monthly rental of Rs. 10 000, taking the annual rent money at once. From that money, he paid the annual rates and spent Rs. 15 000 for annual maintenance of the house. He deposited the remaining amount in a bank which pays an annual simple interest of 10%. What is the total amount he received at the end of the year?

**03. (a)** A class teacher distributed 3 pens for each boy in the class and 5 pens for each girl in the class. The number of boys in the class is 5 less than the three times the number of girls. The total number of pens distributed were 153.

- (i) By taking the number of boys in the class as  $x$  and the number of girls in the class as  $y$ , build up a pair of simultaneous equations.
- (ii) Solve the pair of equations and find the number of boys and the number of girls in the class.

(b) Expand  $(x + 5)^3$

**04.** From the following figures, the area of the rectangle is  $3\text{cm}^2$  less than the area of the trapezium. All the measurements shown in the figures are given in centimeters. Using these information, build up a quadratic equation and by solving it, show that there exists two different values for the area of the rectangle.



**05.** Following table illustrate the information on the number of refrigerators manufactured by a certain refrigerator manufacturing factory during a certain month.

No of refrigerators	20 – 30	30 – 40	40 – 50	50 – 60	60 – 70	70 – 80
No of days	3	6	8	7	4	2

- (i) What is the modal class of the distribution?
- (ii) By taking the mid value of the modal class as assumed mean, find the mean number of refrigerators manufactured in a day.
- (iii) If the manufacturing company gained a profit of Rs. 5 000 by selling a refrigerator, show that the profit gained by the company during the month exceeds 7 million rupees.

**06. (a)** A solid metal cone with the radius  $a$  and the height twice the radius, is melted and a solid hemisphere is made without wasting the metal. Show that the radius of the hemisphere is equal to the radius of the cone.

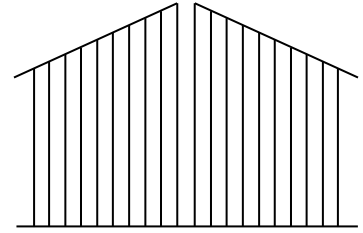
(b) Find the value of the following expression using logarithmic tables.

$$6.82^2 \times \sqrt[3]{0\ 005}$$

**Part B**

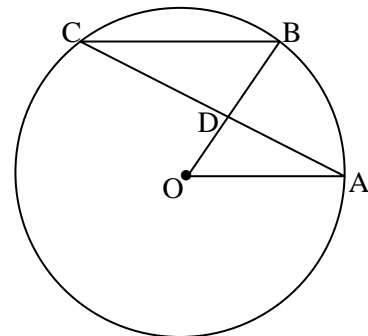
Answer five questions only.

07. Figure shows a two panel gate made of iron rods. The shortest rod of it is 70 cm and every next rod is 5cm more than the previous rod. One panel of the gate is made using 10 such iron rods.

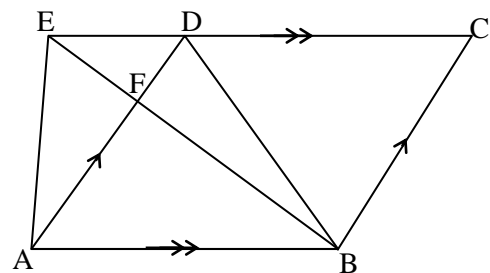


- (i) What is the height of the 10<sup>th</sup> rod?
  - (ii) What is the total length of the iron rods used to make one panel of the gate, in meters?
  - (iii) What is the total length of the iron rods used to make the both panels of the gate?
  - (iv) If 1m of the iron rod costs Rs. 300, calculate the total amount spent for the iron rods to make both panels of the gate.
08. For the following constructions use only a straight edge with the scale cm / mm and the pair of compasses only. Show the construction lines clearly.
- (i) Construct a circle with the radius 3.5cm.
  - (ii) Mark a point A on the circle and construct a chord where  $AB = 5\text{cm}$ .
  - (iii) Construct a point D on the circle such that  $\hat{A}BD = 30^\circ$ .
  - (iv) Construct a parallel line to AB through D and mark the intersection point of it and the circle as C. Measure and write the CD length.
  - (v) Construct the perpendicular bisector of CD.
  - (vi) Name an angle equal to  $\hat{A}DB$ .

09. O is the centre of the given circle.  $OA \parallel BC$  and  $\hat{A}OB = 60^\circ$ . The lines OB and AC intersect at D. Giving reasons show that  $AD = CD$  and show that  $\triangle OAD \equiv \triangle BCD$ .

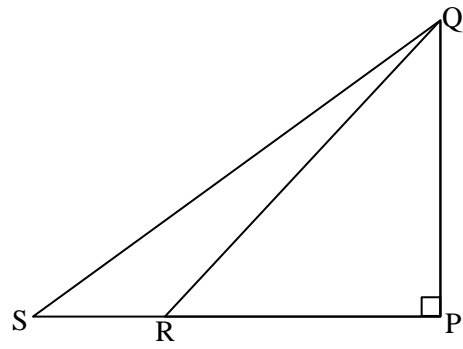


10. In the given figure ABCD is a parallelogram and ABDE is a trapezium. Lines AD and BE intersect at F.



- (i) Name two triangles which are equal to the area of the triangle ABD.
- (ii) Show that, Area of  $\triangle AEF = \text{Area of } \triangle BDF$
- (iii) If  $AB = 2ED$ , show that the ratio between the area of the parallelogram ABCD and the area of the trapezium ABDE is 4 : 3.

11. Figure shows a PQ vertical building situated in the horizontal land and a point R, which is situated 40 m away from the foot of the building. A person who is at R, observes the top of the building at an angle of elevation of  $50^\circ$ . A person who is at the top of the building, observes a point S, which is situated at the same side of R, at an angle of depression of  $30^\circ$ . Copy the given figure in your answer sheet and mark the above information on it.



By drawing a suitable scale diagram, calculate the actual length between R and S.

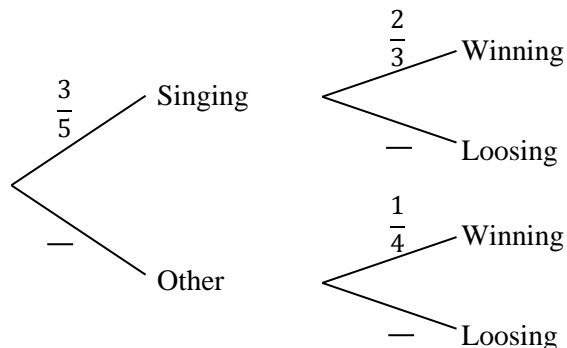
12. (a) Among 50 members who are training in a certain art academy, 30 members practice singing and 28 practice playing music. 10 members do not practice either singing or playing music.

(i) Represent the above information on a Venn diagram.

(ii) Using the Venn diagram, find the number of members who practice both singing and playing music.

- (b) For a certain competition, a member is selected randomly from the art academy. The probability of selecting a competitor from the singing section is  $\frac{3}{5}$ . The probability of a competitor who was selected from singing section winning the competition is  $\frac{2}{3}$ . The probability of a competitor who was selected from other sections, winning the competition is  $\frac{1}{4}$ .

(i) Following tree diagram is drawn to illustrate the above information. Copy it in your answer sheet and fill the blanks.



(ii) Find the probability of the selected competitor winning the competition.